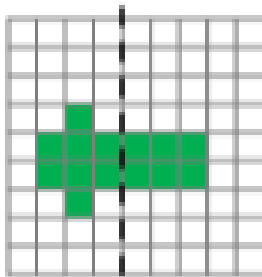


### Symmetric Figures

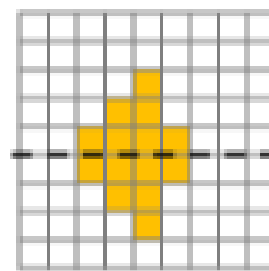
1a. True or false? This pattern has been reflected correctly in the mirror line.



d W


### Symmetric Figures

1b. True or false? This pattern has been reflected correctly in the mirror line.



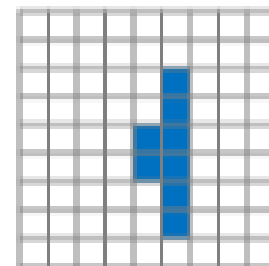
d W

2a. Draw the line of symmetry.



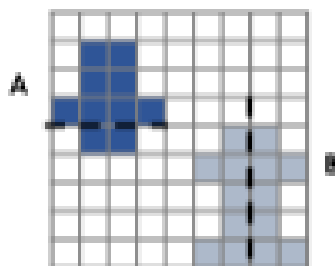
d W

2b. Draw the line of symmetry.



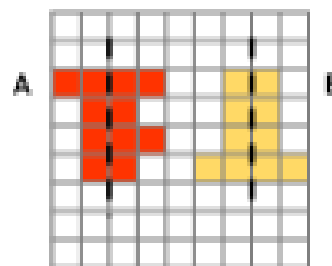
d W

3a. Identify the pattern with the correct line of symmetry.



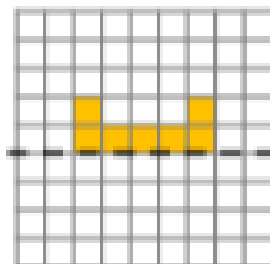
d W

3b. Identify the pattern with the correct line of symmetry.



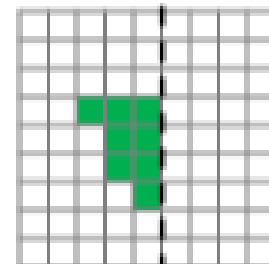
d W

4a. Reflect the pattern in the mirror line.



d W

4b. Reflect the pattern in the mirror line.



d W